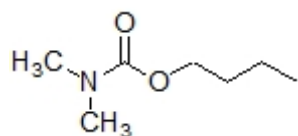


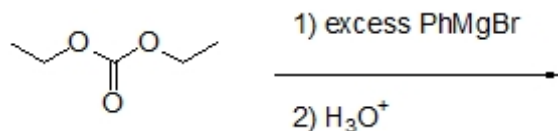
Name: _____

Organic II Lecture
Spring 2012
Quiz #8
(10 points)


1. Provide a correct common name for the following structure. (2 points)



2. Carbonate esters react with Grignard reagents in a similar manner as carboxylate esters. Predict the major product of the following reaction. (3 points, problem 21-55a)



3. Complete the following reaction by filling in the necessary reagents. (2 points)



4. Complete the following reaction by providing a correct structure for the expected product. (3 points)

