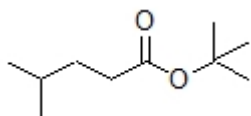


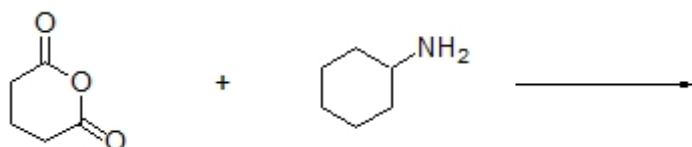
Name: \_\_\_\_\_

**Organic II Lecture**  
**Spring 2012**  
**Quiz #7**  
(10 points)

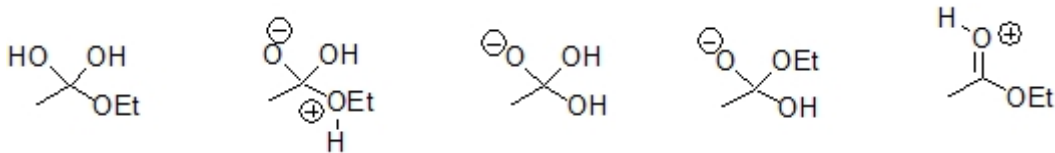
1. Provide a correct common name for the following structure. (2 points)



2. Predict the product for the following reaction. (3 points, problem 21-50d)



3. Circle all of the following that are intermediates in the saponification of ethyl acetate. (3 points)



4. Complete the following reaction by filling in the necessary reagents. (2 points)

