


Name: _____

Organic II Lecture
Spring 2011
Quiz #7
(10 points)

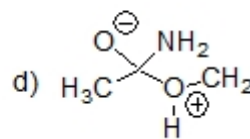
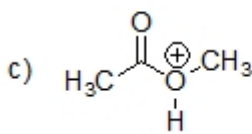
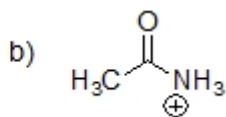
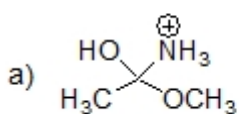
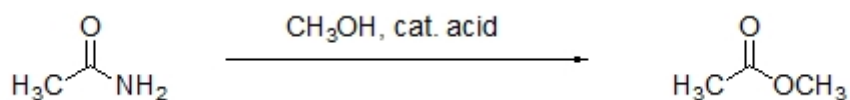
1. Provide an IUPAC name for the following structure. (2 points, problem 20-26e)



2. Complete the following reaction by filling in the necessary reagents. (3 points)



3. Circle all of the following structures that are intermediates in the following reaction. (3 points)



4. Predict a structure for the product of the following reaction. (2 points)

