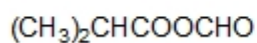


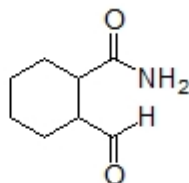
Name: \_\_\_\_\_

**Organic II Lecture**  
**Fall 2012**  
**Quiz #8**  
(10 points)

1. Provide the indicated name for each compound below. (4 points, problem 21-1i)

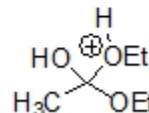
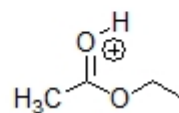
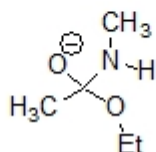
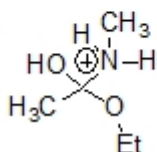
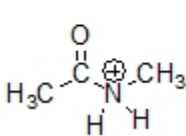
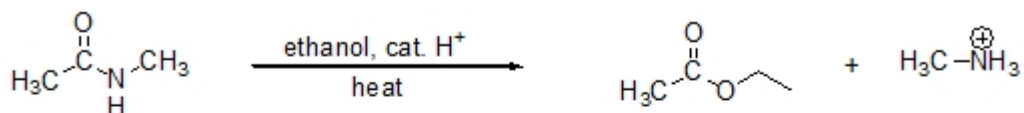


common name



IUPAC name

2. Circle all structures that are an intermediate in the mechanism in the following reaction. (4 points)



3. Complete the following reaction by providing a structure for the expected product. (2 points)

