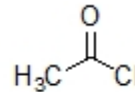
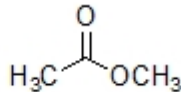
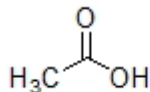
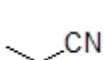


Name: _____

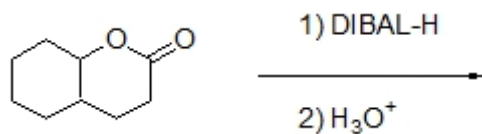
Organic II Lecture
Fall 2011
Quiz #8
(10 points)

1. Provide a common name for $\text{CH}_3\text{CH}(\text{OH})\text{CH}_2\text{CN}$. (2 points, problem 21-1f)

2. Circle the compound having the highest boiling point. (1 point)



3. Complete the reaction below by filling in the correct product. (3 points)



4. Circle all structures that are intermediates of the mechanism of the following reaction. (4 points)

