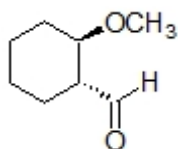


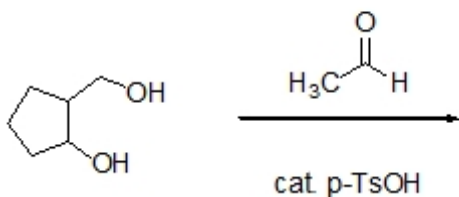
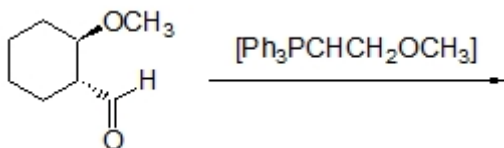
Name: _____

Organic II Lecture
Spring 2012
Quiz #5
(10 points)

1. Provide a correct IUPAC name for the following structure. (3 points, problem 18-1c)



2. Complete the following reaction by filling in the missing products. (5 points)



3. Predict the necessary starting material for the following reaction. (2 points)

