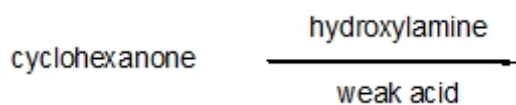




Name: _____

Organic II Lecture
Spring 2009
Quiz #5
(10 points)

1. Draw a structure for the expected product of the following reaction. (2 points, problem 18-56c)



2. Show how the following reactions can be completed by filling in the necessary reagents. (5 points)



3. Draw a structure for the starting material of the following reaction. (3 points)

