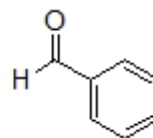
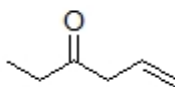
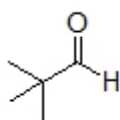


Name: _____

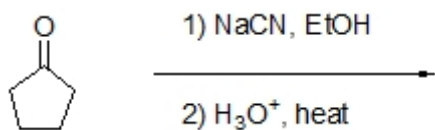
Organic II Lecture
Fall 2011
Quiz #5
(10 points)

1. Draw a structure for acetaldehyde dimethylacetal. (2 points, problem 18-53e)

2. Circle each of the following compounds that can be made beginning with 1,3-dithiane. (3 points)



3. Complete the reaction below by filling in the correct product. (3 points)



4. Complete the following reaction by filling in the missing reagents. (2 points)

