

Name: _____

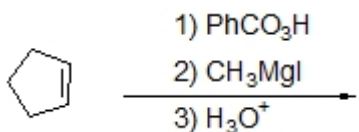
Organic I Lecture

Fall 2012

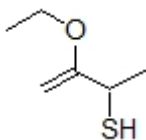
Quiz #9

(10 points)


1. Predict the major product of the following reaction. (3 points, see problem 10-49)



2. Provide a correct systematic name for the following compound. (2 points)



3. Complete the following reaction by filling in the necessary reagents. (2 points)



4. Draw a structure for the necessary starting material of the following reaction. (3 points)

