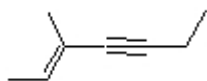



Name: \_\_\_\_\_

**Organic I Lecture**  
**Spring 2012**  
**Quiz #8**  
(10 points)

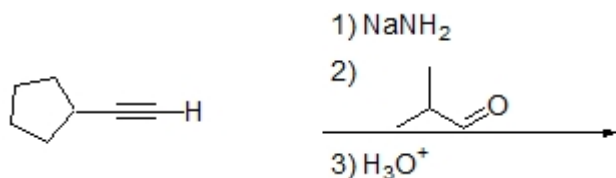
1. Provide an IUPAC name for the following compound. (2 points, problem 9-29d)



2. Complete the following conversion by filling in the necessary reagents. (4 points)



3. Draw a structure for the expected product of the following reaction. (3 points)



4. What reagent is needed to complete the following reaction? (1 point)

