


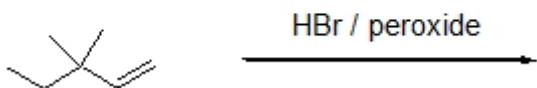
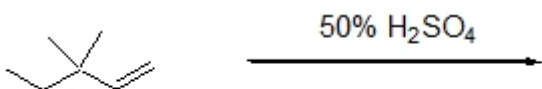
Name: _____

Organic I Lecture
Spring 2011
Quiz #7
(10 points)

1. Complete the following reaction by filling in the necessary reagents. (4 points, problem 8-22c)



2. Draw structures for the product of each reaction. (4 points)



3. Complete the following reaction by filling in the necessary reagent. (2 points)

