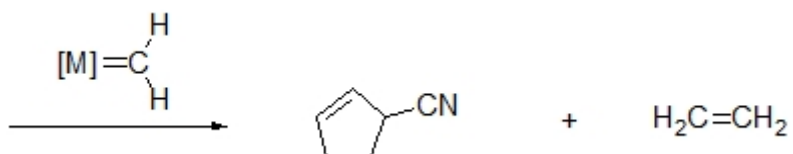


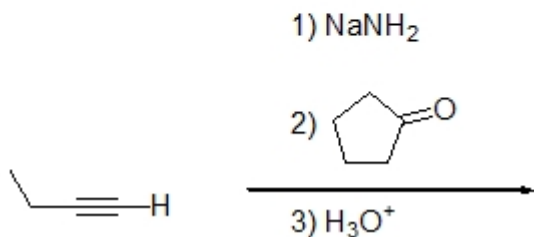
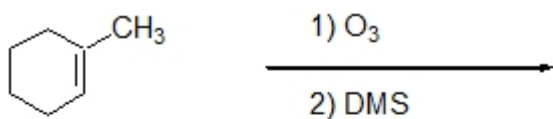
Name: \_\_\_\_\_

**Organic I Lecture**  
**Spring 2011**  
**Quiz #8**  
(10 points)

1. Predict the starting material for the following reaction. (2 points)



2. Complete the following reactions by drawing structures for each expected product. (6 points, problem 8-47L)



3. Provide a systematic name for the following compound. Include any necessary stereochemical indicators. (2 points)

